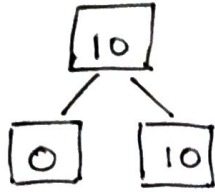


DATE:-

NUMBER BONDS TO 10

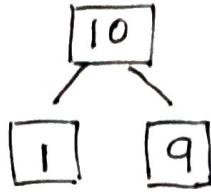
FILL IN THE MISSING NUMBER



$$\square + 10 = 10$$

$$\square - 0 = 10$$

$$10 + \square = 10$$

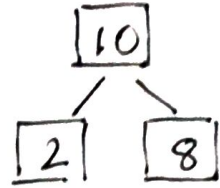


$$9 + \square = 10$$

$$1 + \square = 10$$

$$10 - \square = 9$$

$$10 - \square = 1$$

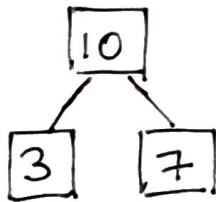


$$\square + \square = 10$$

$$10 - \square = 2$$

$$8 + \square = 10$$

$$10 - \square = 8$$

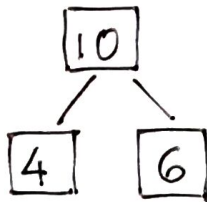


$$\square + 7 = 10$$

$$\square + \square = 10$$

$$10 - \square = 3$$

$$\square - 3 = 7$$

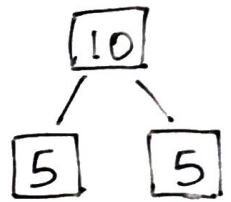


$$4 + \square = 10$$

$$6 + \square = 10$$

$$\square - 6 = 4$$

$$\square - 4 = 6$$



$$\square + \square = 10$$

$$\square - 5 = 5$$

GRAPH A BLEND

FIND AND CIRCLE THE BLENDS.
FILL OUT THE GRAPH

GRAB TRUNK BRAG FREE BROWN BRIM
FROG TRAP GRIP BRAVE GROW BRING
TRAIN TRUCK TRIP BRIGHT GRAPE FRONT

BR	FR	GR	TR

HOW MANY DID YOU FIND?

BR	
FR	
GR	
TR	

WORD PROBLEMS FOR ADDITION & SUBTRACTION

READ AND SOLVE:-

YOU HAVE 7 BALLOONS AND YOUR FRIEND HAS 5 BALLOONS. HOW MANY EXTRA BALLOONS DO YOU HAVE?

2 BIRDS WERE SITTING ON THE FENCE, 4 MORE BIRDS CAME TO JOIN THEM. HOW MANY BIRDS ARE SITTING ON THE FENCE?


YOU HAVE 7 COOKIES AND YOU ATE 2 OF THEM. HOW MANY COOKIES DO YOU HAVE LEFT?

YOU HAVE COLLECTED 7 CRICKETS. HOW MANY MORE CRICKETS DO YOU NEED TO COLLECT TO MAKE 11 CRICKETS?

A BEE HAS 6 LEGS. HOW MANY LEGS DO 2 BEES HAVE?

10 MORE, 10 LESS

COUNT BY TENS . WRITE 10 LESS ON THE LEFT SIDE OF THE UMBRELLA AND 10 MORE ON THE RIGHT SIDE



UNSCRAMBLE THE WORDS

TOPIC :- LIVING AND NON-LIVING

LARUTAN →

DOOF →

EGNAHC →

DUDLC →

RETAW →

NUS →

RIA →

ECAPS →

GNIVIL →

RETLEHS →

CLUES:-

SOME NON-LIVING THINGS ARE MAN MADE, SOME ARE _____
LIVING THINGS GROW AND _____

THINGS ARE NON-LIVING OR _____

WE DRINK THIS AND ALL ANIMALS AND PLANTS NEED
ALL ANIMALS AND PLANTS NEED THIS

PLANTS AND ANIMALS NEED THIS, WE EAT IT

THIS IS AN EXAMPLE OF A NON-LIVING MOVING THING

PLANTS NEED THE LIGHT FROM THE _____ TO GROW

WE LIVE HERE AND ALL ANIMALS NEED THIS TOO

PLANTS DONT NEED SHELTER BUT THEY NEED THIS _____

CAN YOU GUESS WHO I AM ?

IF YOU SUBTRACT 19 FROM 20. I AM

IF YOU SUBTRACT 15 FROM 18. I AM

IF YOU SUBTRACT 6 FROM 8. I AM

IF YOU SUBTRACT 9 FROM 11. I AM

IF YOU SUBTRACT 6 FROM 9. I AM

WORK OUT THE SUMS

BY HOW MUCH IS 8 LESS THAN 12

BY HOW MUCH IS 15 LESS THAN 21

BY HOW MUCH IS 9 LESS THAN 18

BY HOW MUCH IS 14 GREATER THAN 10

BY HOW MUCH IS 18 GREATER THAN 3

UNSCRAMBLE THESE NUMBER NAMES

ENT

INENYT

IRTYH

IFTFY

FRUOYT

THWEYT

IETHGY

VENSEYT